


Count Backwards Through Zero

twinkl

Counting Backwards

Fatima counts backwards from 10:



10



Counting Backwards

Fatima counts backwards from 10:



Counting Backwards

Fatima counts backwards from 10:



Counting Backwards

Fatima counts backwards from 10:



Counting Backwards

Fatima counts backwards from 10:



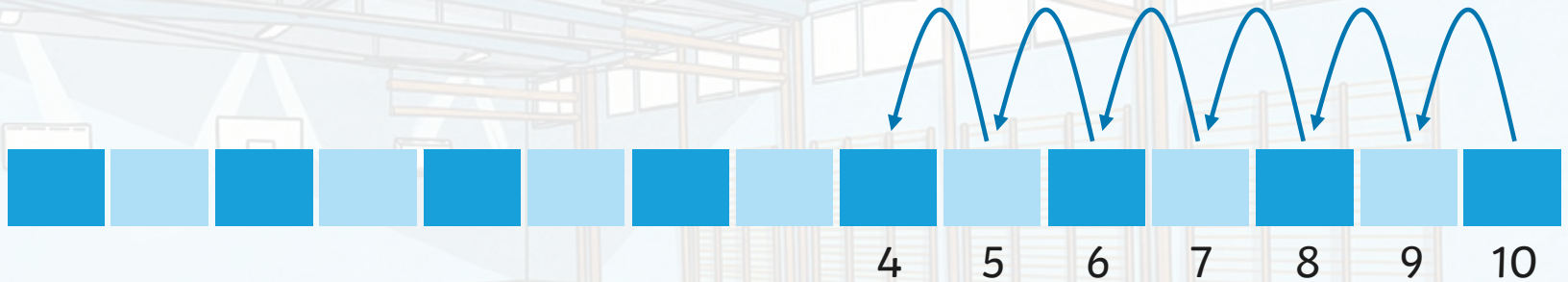
Counting Backwards

Fatima counts backwards from 10:



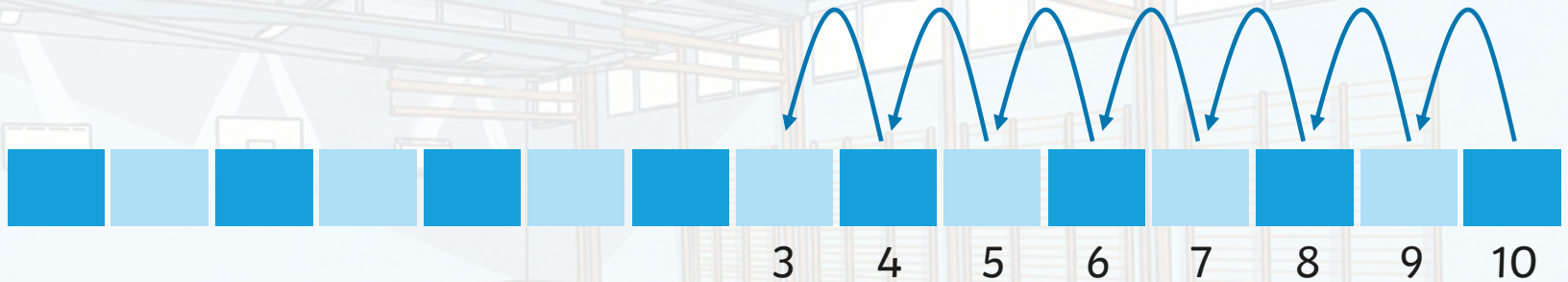
Counting Backwards

Fatima counts backwards from 10:



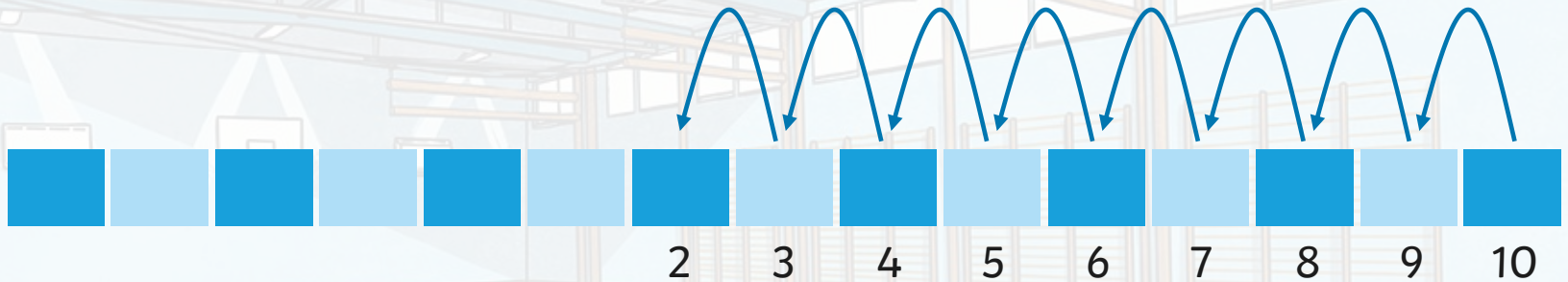
Counting Backwards

Fatima counts backwards from 10:



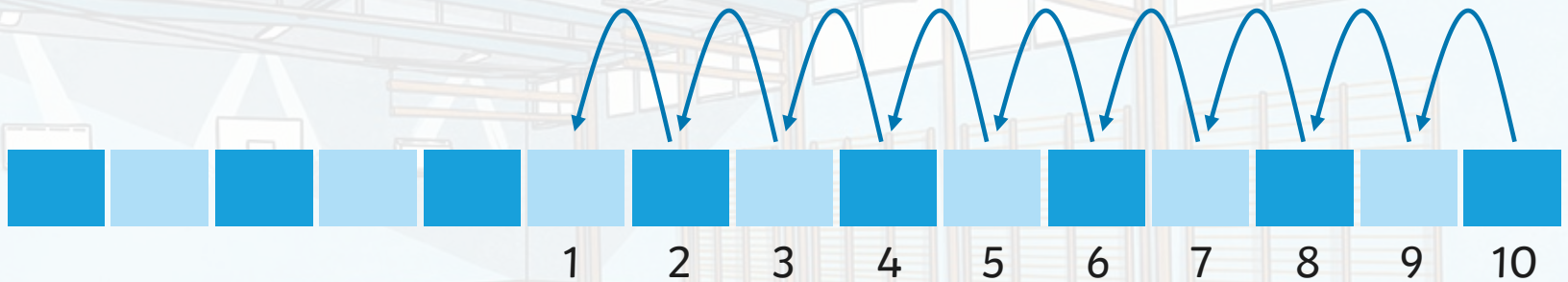
Counting Backwards

Fatima counts backwards from 10:



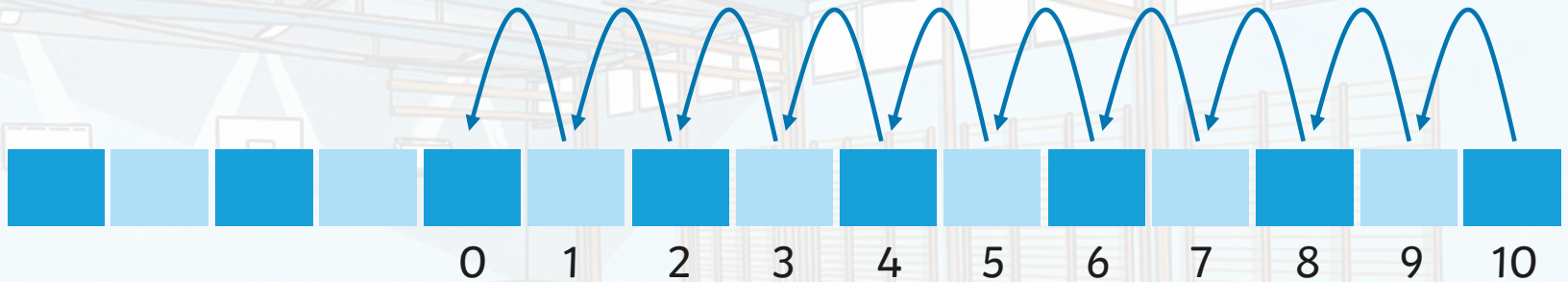
Counting Backwards

Fatima counts backwards from 10:



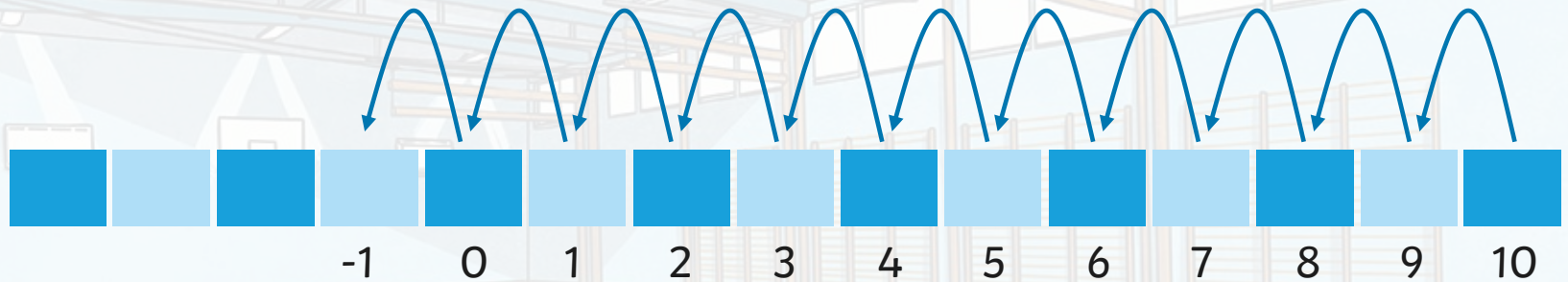
Counting Backwards

Fatima counts backwards from 10:



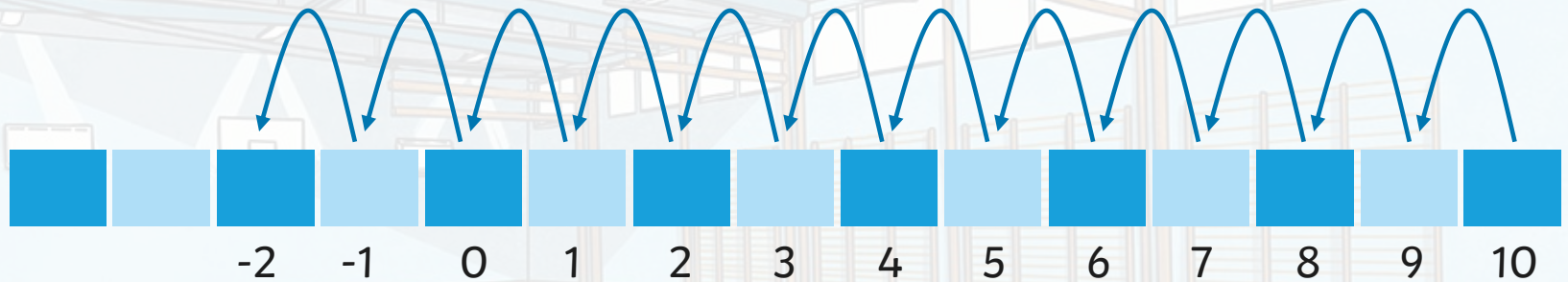
Counting Backwards

Fatima counts backwards from 10:



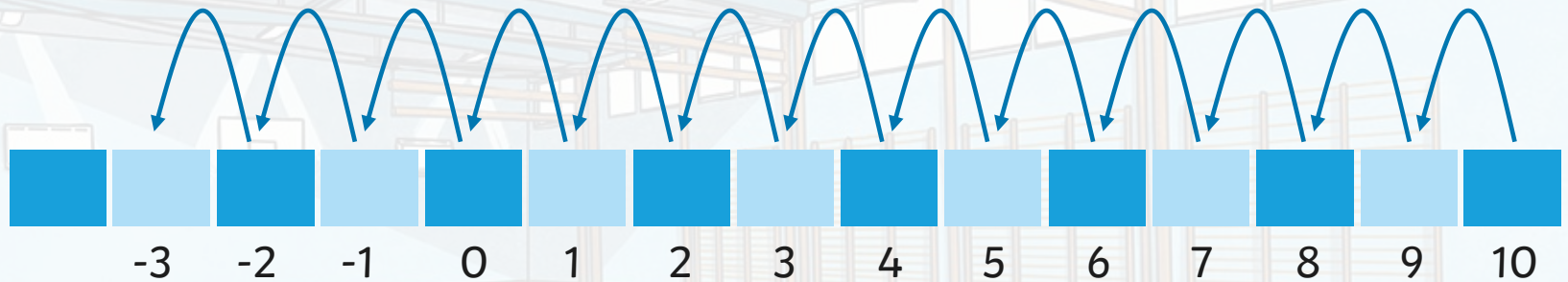
Counting Backwards

Fatima counts backwards from 10:



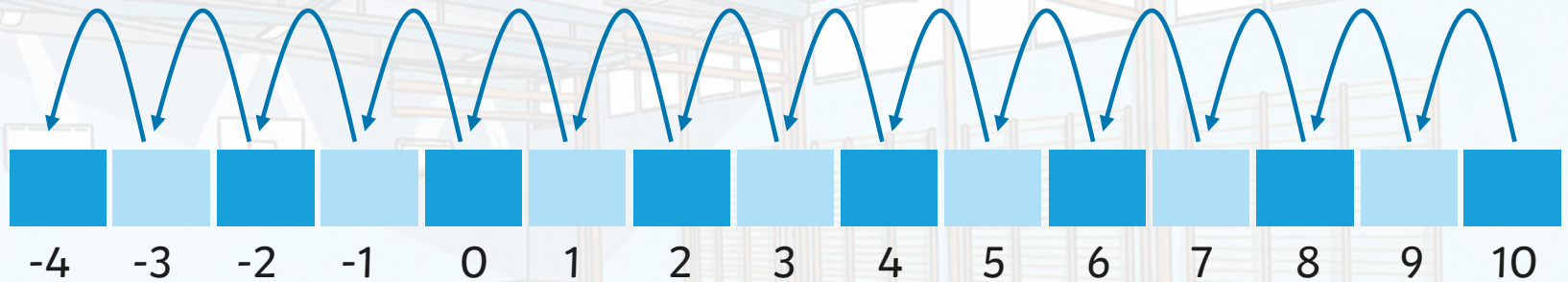
Counting Backwards

Fatima counts backwards from 10:




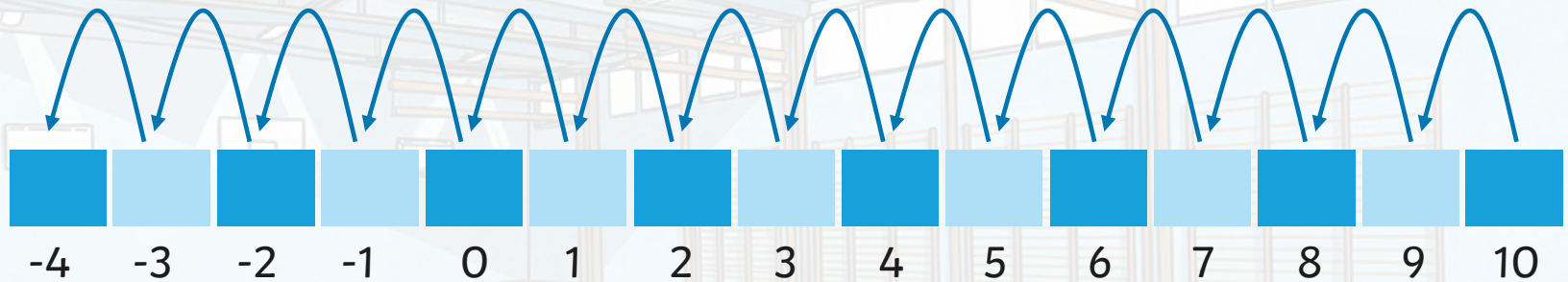
Counting Backwards

Fatima counts backwards from 10:



Counting Backwards

Fatima counts backwards from 10:



Continue counting.

Number Line

Here is a number line with some numbers marked. Laura needs some help to complete the line.



Check your answer with a partner.



Number Line

Here is a number line with some numbers marked. Laura needs some help to complete the line.



Check your answer with a partner.



Number Line

Here is a number line with some numbers marked. Laura needs some help to complete the line.



Check your answer with a partner.



Number Line

Here is a number line with some numbers marked. Laura needs some help to complete the line.



Check your answer with a partner.



Number Line

Here is a number line with some numbers marked. Laura needs some help to complete the line.



Check your answer with a partner.



Number Line

Here is a number line with some numbers marked. Laura needs some help to complete the line.



Check your answer with a partner.



Number Line

Here is a number line with some numbers marked. Laura needs some help to complete the line.



Check your answer with a partner.



Number Line

Here is a number line with some numbers marked. Laura needs some help to complete the line.

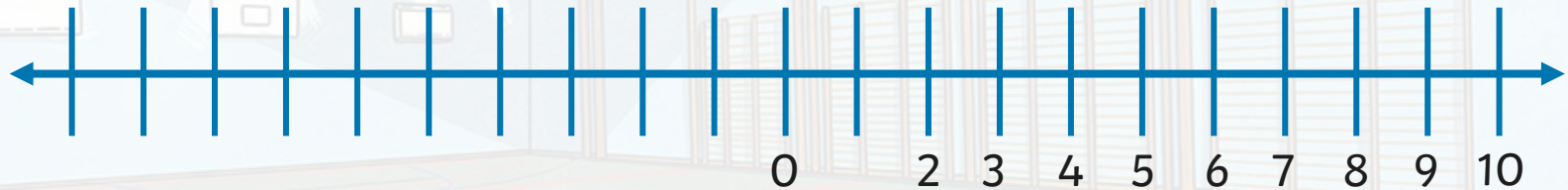


Check your answer with a partner.



Number Line

Here is a number line with some numbers marked. Laura needs some help to complete the line.



Check your answer with a partner.



Number Line

Here is a number line with some numbers marked. Laura needs some help to complete the line.



Check your answer with a partner.



Number Line

Here is a number line with some numbers marked. Laura needs some help to complete the line.



Check your answer with a partner.



Number Line

Here is a number line with some numbers marked. Laura needs some help to complete the line.



Check your answer with a partner.



Number Line

Here is a number line with some numbers marked. Laura needs some help to complete the line.



Check your answer with a partner.



Number Line

Here is a number line with some numbers marked. Laura needs some help to complete the line.



Check your answer with a partner.



Number Line

Here is a number line with some numbers marked. Laura needs some help to complete the line.



Check your answer with a partner.



Number Line

Here is a number line with some numbers marked. Laura needs some help to complete the line.



Check your answer with a partner.



Number Line

Here is a number line with some numbers marked. Laura needs some help to complete the line.

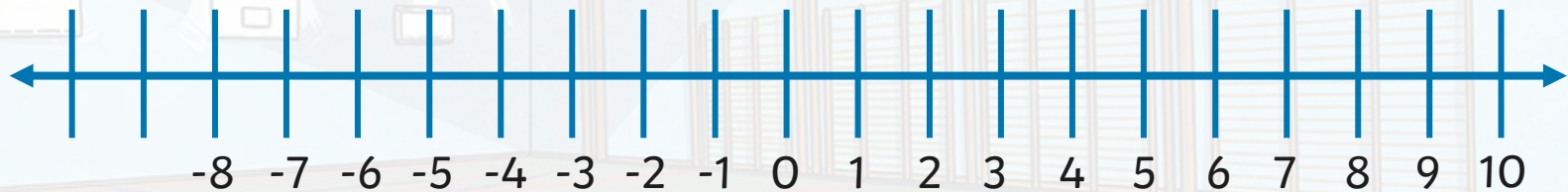


Check your answer with a partner.



Number Line

Here is a number line with some numbers marked. Laura needs some help to complete the line.



Check your answer with a partner.



Number Line

Here is a number line with some numbers marked. Laura needs some help to complete the line.



Check your answer with a partner.



Number Line

Here is a number line with some numbers marked. Laura needs some help to complete the line.

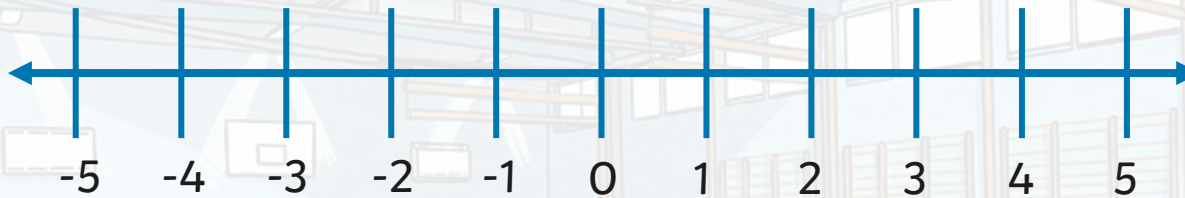


Check your answer with a partner.



Questions on a Number Line

Alfie draws a number line and writes some questions:

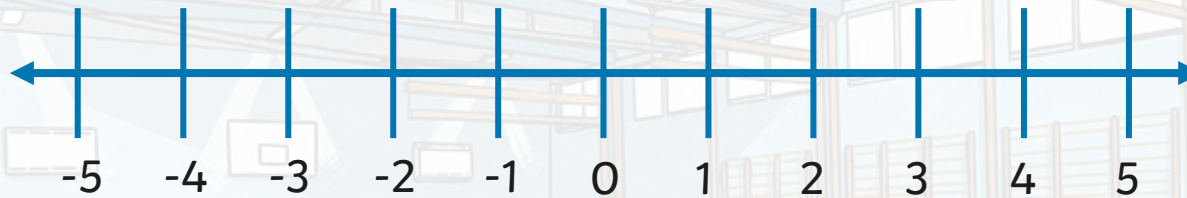


1. What number is 7 less than 4?
2. Count 6 backwards from 2.
What number do you get to?
3. What number is 5 less than 3?



Questions on a Number Line


Alfie draws a number line and writes some questions:



1. What number is 7 less than 4?
2. Count 6 backwards from 2.
What number do you get to?
3. What number is 5 less than 3?

-3, -4, -2





twinkl